

Geometry


Name : Class :

Score :

Symmetry

Which objects are symmetrical ? Trace the line of symmetry.

1)



.....

2)




3)



.....

4)



.....

5)



.....

Geometry

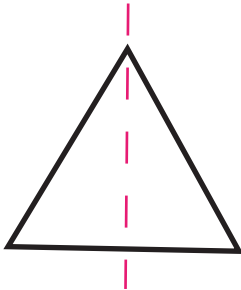
Name : Class :

Score :

Answers to Symmetry

Which objects are symmetrical ? Trace a line of symmetry.

1)




.....

2)



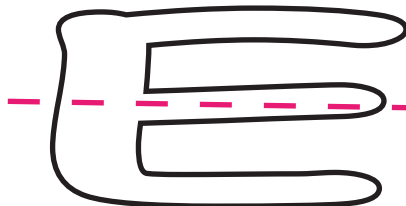
.....

3)




.....

4)



.....

5)



.....